
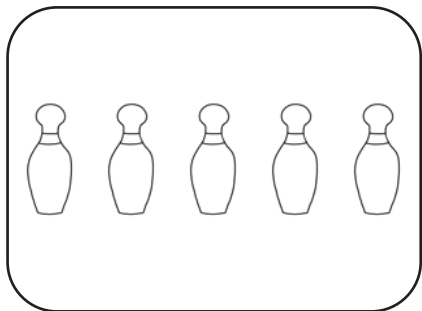




L'ADDIZIONE

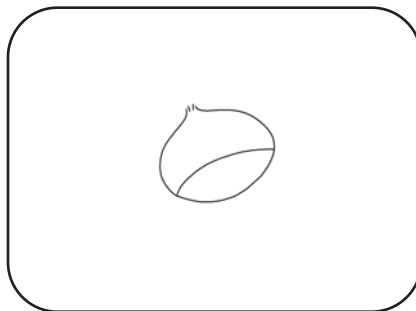

1 Osserva, conta e scrivi il risultato dell'addizione.



$$\boxed{5} + \boxed{2} = \boxed{}$$

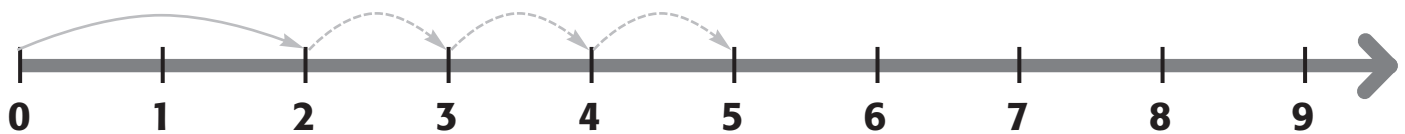


$$\boxed{4} + \boxed{4} = \boxed{}$$

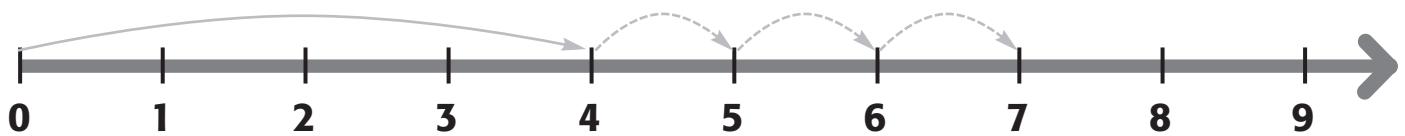


$$\boxed{6} + \boxed{1} = \boxed{}$$

2 Conta i salti ed esegui le addizioni.



$$2 + 3 = \dots\dots\dots$$

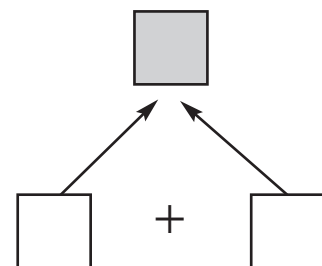
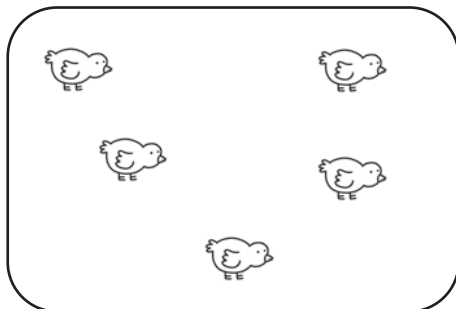
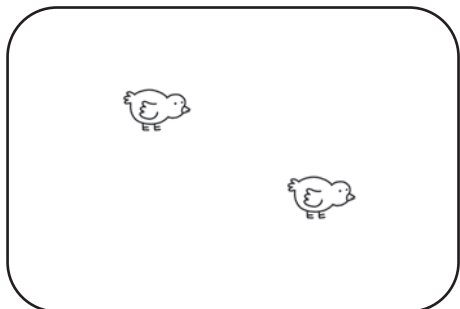
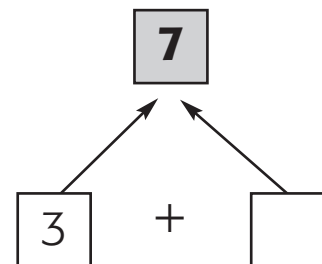


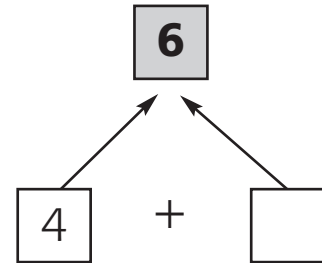
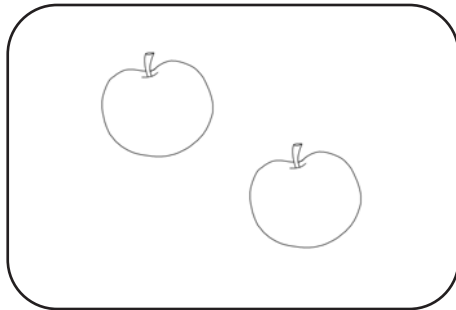
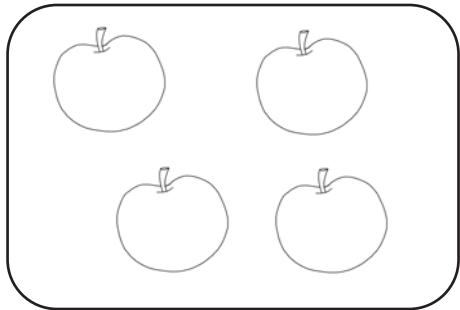


$$4 + 3 = \dots\dots\dots$$

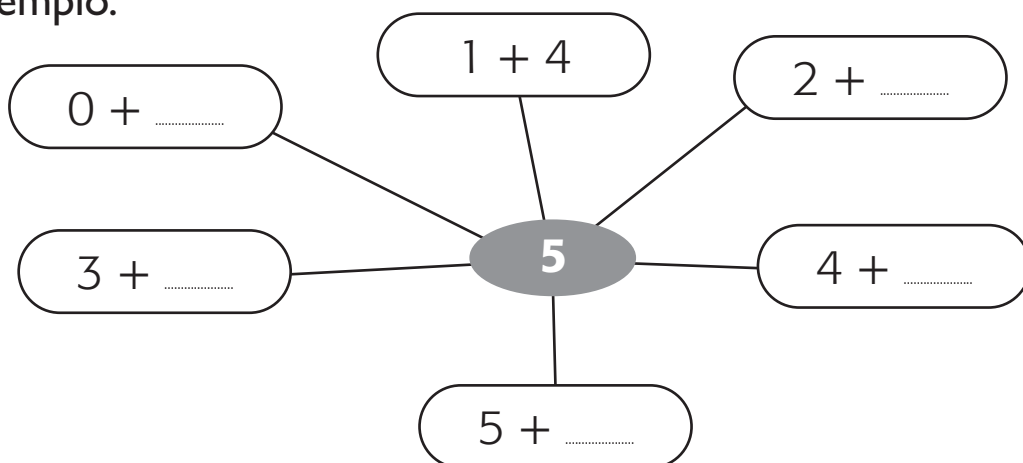


COMPONGO E SCOMPONGO

1 Osserva i disegni e completa con i numeri.



2 Componi in tutti i modi possibili il numero scritto al centro. Segui l'esempio.



ADDIZIONI IN TABELLA E NON

1 Esegui le addizioni che formano il numero dato.

2

0 + 2

1 +

2 +

4

4 +

3 +

2 +

1 +

0 +

8

8 +

7 +

+ 2

+ 3

4 +

3 +

+ 6

+ 7

0 + 8

3

0 + 3

1 +

2 +

3 +



2 Completa le tabelle.

$\curvearrowright +$	0	2	3	4	5
1					
2					
3					
4					


$\curvearrowright +$		1	2	3	4
2	2				
4	4				
	5	6			
					5



PROBLEMI CON L'ADDIZIONE

Completa i disegni, risolvi con l'addizione e completa la risposta.

- 1 La mamma ha steso ad asciugare 3 magliette e 6 calzini. Quanti indumenti ha steso in tutto?




$$\dots + \dots = \dots$$

La mamma ha steso in tutto indumenti.

.....

- 2 Nella cesta ci sono 4 palloni, 3 corde e 2 bambole. Quanti giochi ci sono in tutto?



$$\dots + \dots + \dots = \dots$$

Nella cesta ci sono in tutto

.....

