

Alunno ..... Classe ..... Data .....

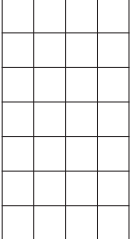
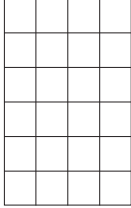
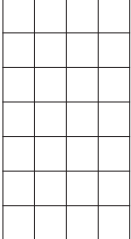
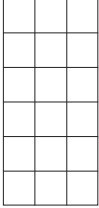

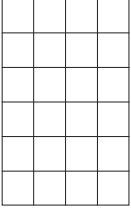
**CLASSE TERZA**

**Le frazioni**

**1** Calcola le parti frazionarie.

<p>Intero 15. Colora <math>\frac{1}{5}</math> di 15</p> 	<p>Intero 35. Colora <math>\frac{1}{7}</math> di 35</p> 	<p>Intero 30. Colora <math>\frac{1}{2}</math> di 30</p> 
---	---	---

**2** Calcola e poi colora.

<p><math>\frac{1}{4}</math> di 28</p> 	<p><math>\frac{1}{4}</math> di 24</p> 	<p><math>\frac{1}{2}</math> di 28</p> 	<p><math>\frac{1}{3}</math> di 18</p> 	<p><math>\frac{1}{5}</math> di 35</p> 	<p><math>\frac{1}{6}</math> di 24</p> 
---	---	---	---	---	---

**3** Calcola, come nell'esempio.

$\frac{1}{5}$ di 40	$40 : 5 =$	.....
$\frac{1}{8}$ di 72	.....	.....
$\frac{1}{10}$ di 200	.....	.....

$\frac{1}{9}$ di 7 200	.....	.....
$\frac{1}{6}$ di 4 800	.....	.....
$\frac{1}{8}$ di 160	.....	.....