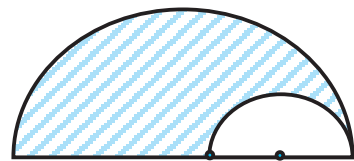
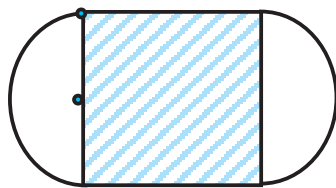

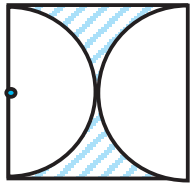



Alunno ..... Classe ..... Data .....

**CLASSE QUINTA**

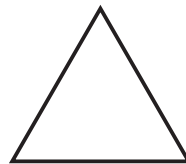
**1** Calcola sul quaderno l'area delle parti tratteggiate.



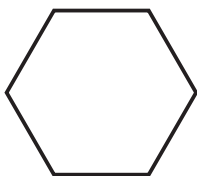
**2** Completa.



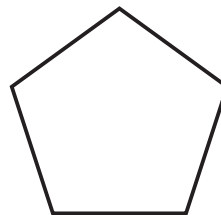
P. = 24 cm  
l = .....  
a = 3 cm  
A. = .....



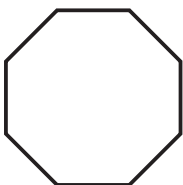
P. = 24 cm  
l = .....  
a = 2,24 cm  
A. = .....




P. = 36 cm  
l = .....  
a = 5,16 cm  
A. = .....



P. = 35 cm  
l = .....  
a = 4,76 cm  
A. = .....



P. = 40 cm  
l = .....  
a = 6,035 cm  
A. = .....



P. = 12,8 cm  
l = .....  
a = 1,6 cm  
A. = .....

**3** Risolvi il seguente problema.

Una piazza a forma di pentagono regolare ha il lato di 24 m. Al centro c'è una fontana rotonda con il raggio di 2,5 m. Qual è l'area della piazza calpestabile?

.....